

DOWNLOAD PDF DOCUMENT



CONGRUENT TRIANGLE QUIZ...

DOWNLOAD DOCUMENT NOW

Updated: 10/28/2017

DISCLAIMER:

CHAUVIN.CO uses the following congruent triangle quiz questions honors geometry book available for free PDF download which is also related with

CONGRUENT TRIANGLE QUIZ QUESTIONS HONORS GEOMETRY

Many users wonder how to download congruent triangle quiz questions honors geometry quickly and for free. We offer you such opportunity, but you have to fulfil several simple conditions - just follow this link, download the necessary program and pass a simple registration. It will take you a brace of shake. Then you will get an access to congruent triangle quiz questions honors geometry and other files that will be useful for your study and job. Moreover, you can find lots of eBooks for professional reading as well as belles-lettres. So, follow the link below to get congruent triangle quiz questions honors geometry in a couple of minutes. congruent triangle quiz questions honors geometry is free to everyone who passes registration. This measure is needed to prevent endless attacks of hackers who aim to destroy our library. Therefore, we ask our users to spend several minutes on registration in order to get free access to congruent triangle quiz questions honors geometry and other PDF files.

DOWNLOAD NOW

DOWNLOAD PDF DOCUMENT

DOWNLOAD PDF DOCUMENT

CONGRUENT TRIANGLE QUIZ...

[MICROSOFT WORD - 2010-2011 HONORS GEOMETRY A REVIEW](#)

HONORS GEOMETRY A Semester Exam Review The Geometry and Honors Geometry Semester A examination will have the following types of questions: ? Selected Response ? Student Produced Response (Grid-in) ? Short Answer A calculator, scrap paper, and patty paper may be used. A compass and straightedge is required. The formulas below will be provided in the examination booklet. Polygon Angle Formulas Coor...

File name: 2010-2011 Honors Geometry A Review.pdf

[Download now or Read Online](#)

[MICROSOFT WORD - QUIZ QUESTIONS 12-13 S1.DOC](#)

EE4101 RF Communications, Part B Quiz Questions, 2012 2013, Semester 1 Write down your answers on the answer sheet provided. Write down your NAME, STUDENTNUMBER, and SIGNATURE on the answer sheet. Intermediate steps will not be marked. Answer all questions. Time allowed is 50 mins. Please submit the answer sheet and the question paper together when you finish. Q1 A plane wave propagating in the free s...

File name: Quiz Questions 12-13 S1.pdf

[Download now or Read Online](#)

[GEOMETRY/ HONORS GEOMETRY REVIEW ANSWERS](#)

Honors Geometry B Review ANSWERS 1 120 18 176 55cm 22 256 64 54 94in 23 48 64 214 80 ft 24 D5 A6 a True b True c False d False e True 7 18 3 28 50 5 29 45 3 510 The coordinates of PQMN are P 1 2 Q 4 5 M 7 3 N 4 0 PQ 32 32 18 MN 32 32 18 QM 32 22 13 PN 32 22 13 Therefore the opposite sides are congruent 110 6 6 0 The coordinates of the midpoint M M 3 32 2 Triangle AMB is a right triangle since the slope of AM...

File name:

[Download now or Read Online](#)

[MICROSOFT WORD - QUIZ QUESTIONS.DOC](#)

Quiz Questions Chapter 10. 1. Find an equation of the sphere .with center (3,8,1) and contains the point (4,3, ?1) 2. Find an equation of the sphere in which the points (2, ?1,1) and (3,1,5) are endpoints of a diameter. 3. Let $u = 1, ?1, 3$ and $v = 1, 4, 1$. (a) Find $u + v$ (b) Find $3u$ (c) Find $u \cdot v$ (d) Are u and v perpendicular? 4. Find the angle between the vectors $u = 3, ?1, 2$ and $v = 4, 2, 3$. 5. Let $u \dots$

File name: Quiz Questions.pdf















[Download now or Read Online](#)

DOWNLOAD PDF DOCUMENT

DOWNLOAD PDF DOCUMENT

Here below another book similar with:

CONGRUENT TRIANGLE QUIZ...

-  [congruent triangle quiz questions honors geometry](#)
-  [60s music trivia quiz book 380 multiple choice quiz questions from the 1960s music trivia quiz book 1960s music trivia volume 1](#)
-  [solving proportions isosceles triangle quiz](#)
-  [honors biology questions final](#)
-  [4 1 congruent figures answers](#)
-  [performance tasks congruent triangles](#)
-  [triangle training cards](#)
-  [bottom of a triangle name](#)
-  [honors biology exam multiple choice enzymes](#)
-  [triangle solutions](#)
-  [civil honors or awards on resume](#)
-  [honors for master guide](#)
-  [tex winter triangle offense drills](#)
-  [answers for algebra 1 honors gold series](#)
-  [e2020 geometry quiz answers](#)
-  [act coordinate geometry questions](#)
-  [test questions for geometry constructions](#)
-  [quiz questions about assam history](#)
-  [quiz questions from the daniel](#)
-  [work instruction quiz questions answers](#)

DOWNLOAD PDF DOCUMENT