

DOWNLOAD PDF DOCUMENT



CHAPTER 36 TEST BANK

DOWNLOAD DOCUMENT NOW

Updated: 10/11/2017

DISCLAIMER:

CHAUVIN.CO uses the following chapter 36 test bank book available for free PDF download which is also related with

CHAPTER 36 TEST BANK

Many users wonder how to download chapter 36 test bank quickly and for free. We offer you such opportunity, but you have to fulfil several simple conditions - just follow this link, download the necessary program and pass a simple registration. It will take you a brace of shake. Then you will get an access to chapter 36 test bank and other files that will be useful for your study and job. Moreover, you can find lots of eBooks for professional reading as well as belles-lettres. So, follow the link below to get chapter 36 test bank in a couple of minutes. chapter 36 test bank is free to everyone who passes registration. This measure is needed to prevent endless attacks of hackers who aim to destroy our library. Therefore, we ask our users to spend several minutes on registration in order to get free access to chapter 36 test bank and other PDF files.

DOWNLOAD NOW

DOWNLOAD PDF DOCUMENT

DOWNLOAD PDF DOCUMENT

CHAPTER 36 TEST BANK

[EXAMVIEW - CHAPTER 14 TEST REVIEW- WILLIAMS.TST](#)

Name: Period: Date: K. Williams ID: A8th Grade Chapter 14 TEST REVIEW 1. Determine the volume of the cylinder. Use 3.14 for π . 2. Complete the table to identify the effect tripling the radius of a cylinder's base has on its volume. Cylinder radius Cylinder Area of Cylinder Height Cylinder Volume (cm³) r Base (cm) A πr^2 (cm²) h (cm) V $\pi r^2 h$ 1 1 3 1 9 1 3. Identify the radius, diameter, and height ...

File name: ExamView - Chapter 14 Test Review- Williams.pdf
[Download now or Read Online](#)

[MICROSOFT WORD - CHAPTER 2 TEST REVIEW ANSWERS.DOCX](#)

Honors Geometry Chapter 2 Test Review Question Answers 1. Given: $BA \perp AT$ $(51 - x) + (y + 9) = 180$ Find: $m\angle MAT$? $y = 120 + x$ $(y + 9) + (x + y) = 90$ B ? $x + 2y = 81$ $x + 2(120 + x) = 81$? $x + 240 + 2x = 81$? $3x = -159$ M $51 - x + y + 9$ N $A + x + y$? $x = -53$ T ? $y = 120 + (-53) = 67$? $m\angle MAT = 180 - (x + y) = 180 - 14 = 166$ 2. A certain angle is 39 less than 2 times its complement. Find its supplement. $x = 2(90 - \dots$

File name: Chapter 2 Test Review Answers.pdf
[Download now or Read Online](#)

[MICROSOFT WORD - CHAPTER 11 TEST REVIEW QUESTION ANSWERS.DOCX](#)

Honors Geometry Chapter 11 Test Review Question Answers 1. Find the area of an equilateral triangle that has sides that measure 8 7 . $s^2 = 3$ $A_{Equ.} = \frac{4}{3} (8 7)^2 = 3 448 3 = = (112 3) u^2 4 4 2$. A rotor of a Wankel automotive engine has the geometric shape shown. The center of each arc is the opposite vertex of the equilateral triangle. a. Find the figure's area a. $A = A + 3(A_{Segment})$ b. Find the figur...

File name: Chapter 11 Test Review Question Answers.pdf
[Download now or Read Online](#)

[IB CHAPTER 8 TEST FORM 2A DO NOT WRITE ON TEST](#)

For any credit show all work on a separate sheet of paper for all problems. 13.14. IB Chapter 8 Test Free Response Name: Date; Per: Answer each question on a separate sheet of paper. For each problem do the following: a. Copy or draw a figure. Mark the figure up with the given information. b. Show all calculations. c. Make sure your final answer has the correct units. 1.2.3.4.5. 6. ???? Bonus: a.b. ...





















File name: Chapter 8 Test Form 2A including Free Response IB.pdf
[Download now or Read Online](#)

DOWNLOAD PDF DOCUMENT

DOWNLOAD PDF DOCUMENT

Here below another book similar with:

CHAPTER 36 TEST BANK

-  [pearson abnormal psychology test bank chapter 6](#)
-  [chapter 4 job costing test bank](#)
-  [chapter 36 test bank](#)
-  [test bank for micro and macroeconomics](#)
-  [test bank in geriatric](#)
-  [printed test bank pearson learning solutions](#)
-  [free test bank medical surgical nursing inatavicius](#)
-  [test bank questions for earth science](#)
-  [test bank essentials of investments 9th edition](#)
-  [managing and using information systems test bank](#)
-  [pathophysiology for the health professions test bank](#)
-  [biology second edition brooker test bank](#)
-  [operation management test bank 4th slack](#)
-  [human physiology silverthorn 6th edition test bank](#)
-  [bank examiner test questions](#)
-  [college physics serway 9th edition test bank](#)
-  [evolve instructor test bank](#)
-  [wileyplus test bank answers organic chemistry](#)
-  [test bank accounting principles ninth edition](#)
-  [test bank anatomy and physiology saladin](#)

DOWNLOAD PDF DOCUMENT