

# DOWNLOAD PDF DOCUMENT



## CHAPTER 2 MATH TEST

**DOWNLOAD DOCUMENT NOW**

**Updated:** 10/21/2017

---

### **DISCLAIMER:**

CHAUVIN.CO uses the following chapter 2 math test book available for free PDF download which is also related with

### **CHAPTER 2 MATH TEST**

Our digital library offers you to download chapter 2 math test and other files in PDF format for free. There is no need to pay for registration, but you will have to pass it in order to get an unlimited access to the stock of eBooks. So, if you need chapter 2 math test, just follow the link below, pass the registration and enjoy reading chapter 2 math test or other books from almost any advice supporting PDF format. You may ask why we ask our users to pass registration. It is done to simplify the work of the library and prevent countless hackers' attacks that cause certain discomfort to the users of our digital library. You need to register only once in order to get an access to chapter 2 math test and other files. It will take you little time to register and then to download chapter 2 math test.

---

**DOWNLOAD NOW**

# DOWNLOAD PDF DOCUMENT

# DOWNLOAD PDF DOCUMENT

## CHAPTER 2 MATH TEST

### CHAPTER 2 PRACTICE TEST

Algebra II Chapter 2 Practice Test Name: Do problems by hand, showing work unless otherwise instructed. Calculators are OK. 1. For the points  $A = (5, -4)$  and  $B = (1, -12)$  a) Find the midpoint of AB b) Find the length of AB c) Find the slope of AB d) Find the equation of the line through A and B e) Find the coordinates of point C such that A is the midpoint of BC f) Honors Extra Credit: What point ...

**File name:** Chapter 2 Practice Test.pdf  
[Download now or Read Online](#)

### MATH 025: BEGINNING ALGEBRA, CHAPTER 3 SAMPLE TEST

Instructor: Theresa Pham Name: Class Section: 1. Solve:  $[5 \ 4]$  2. Solve:  $[41 \ 8]$  3. Solve:  $[6]$  4. Solve:  $[3]$  5. Solve:  $[7 \ 24]$  6. Solve:  $[1]$  7. What percent of 125 is 50?  $[40\%]$  8. Play All Day toy Store purchases a trampoline for \$75. To sell the trampoline to customers, the price is increased by 29%. Find the new price of the trampoline.  $[\$96.75]$  9. A music store uses a markup rate of 60%. The store sells a ...

**File name:** Math 025 Chapter 3 Sample Test.pdf  
[Download now or Read Online](#)

### MICROSOFT WORD - CHAPTER P PRACTICE TEST.DOC

Algebra 2 P Chapter Practice Test Name: Please show your work. You are allowed only a basic calculator. This is last years test. 1. Perform the indicated operations and simplify a)  $(5x^2 - 7y)$  b)  $(2x + 7)(3x^2 - 8x + 1)$  2. Factor each expression completely a)  $x^2 - 3x - 40$  b)  $2x^3 + x^2 - 6x - 3$  c)  $x^4 + 5x^3 + 6x^2$  d)  $2(a + b)^2 + 5(a + b) - 33$ . a) Write  $? < x < 8$  in interval notation and...

**File name:** Chapter P Practice Test.pdf  
[Download now or Read Online](#)

### SECONDARY I CHAPTER 1 PRACTICE TEST NAME \_\_\_\_\_ PERIOD \_\_\_\_\_

1. Brie knows there is a relationship between the grades on her math tests and the time she spends studying for those tests. Identify the independent quantity and the dependent quantity in this problem situation. 2. Tell whether each graph represents a function. a. b. c. d. 3. Classify each function as increasing, decreasing, or constant. (use the graphing calculator a. b. c. d. , where  $x$  is an i...

**File name:** Secondary I Chapter 1 Practice Test revised.pdf  
[Download now or Read Online](#)





















# DOWNLOAD PDF DOCUMENT

# DOWNLOAD PDF DOCUMENT

Here below another book similar with:

## CHAPTER 2 MATH TEST

---

-  [ags consumer math math test](#)
-  [chapter 2 math test](#)
-  [math dictionary with solutions a math review](#)
-  [guided math schedule using saxon math](#)
-  [go math chapter 11 extra practice answer](#)
-  [math test warehouse operative](#)
-  [teas test math practice](#)
-  [usa kangaroo math 2012 test answer](#)
-  [sat 10 first grade math test](#)
-  [trade union math aptitude test](#)
-  [cheat sheet for compass math test](#)
-  [crtc practice test 8th grade math dekalb](#)
-  [big ideas math cumulative test practice](#)
-  [ged math practice test free pdf](#)
-  [sat act math test](#)
-  [envision math test answers](#)
-  [math baseline test](#)
-  [dr chung sat math test 4 answers](#)
-  [test answers for edgenuity math](#)
-  [math polynomials unit test](#)

# DOWNLOAD PDF DOCUMENT