

DOWNLOAD PDF DOCUMENT



CHAPTER 2 GEOMETRY TEST

DOWNLOAD DOCUMENT NOW

Updated: 10/21/2017

DISCLAIMER:

CHAUVIN.CO uses the following chapter 2 geometry test book available for free PDF download which is also related with

CHAPTER 2 GEOMETRY TEST

It is so easy to download chapter 2 geometry test and hundreds of other files from our digital library. Which is more, you don't have to pay for this service. It is completely free! To start with you have to follow the link below, download the program and register on the site. It is fast. No money is needed. Then you get a free access to chapter 2 geometry test and other PDF documents which can also be downloaded to your PC or other devices and used when needed. Don't think that we get some profit from registration. It is because of constant hackers' attacks that do harm to our library and prevent our users from downloading chapter 2 geometry test and other files. Registration helps to make the process of using our eBook library more comfortable. When you pass the registration, you can get chapter 2 geometry test immediately. So, if you or your friend needs chapter 2 geometry test, just make simple steps and get as many books as you need for free

DOWNLOAD NOW

DOWNLOAD PDF DOCUMENT

DOWNLOAD PDF DOCUMENT

CHAPTER 2 GEOMETRY TEST

CHAPTER 1 GEOMETRY TEST

m Geometry Chapter 4 Form B Test Geometry-Chapter 4 3122012 Geometry Made Simple I Frank Schaffer Publications Incl F Sta congruent trianEi es Di P T - FS122012 Geometry Made Simplelggr k8chaert ublicauons Inc Chapter Test 10Chapter Test 592 Chapter 10 Chapter Test Chapter 10 Chapter 10 Find the area of each figure If your answer is not ananswer in terms of Informal Geometry Ch 10 Pearson Educatio...

File name:

[Download now or Read Online](#)

CHAPTER 2 PRACTICE TEST

Algebra II Chapter 2 Practice Test Name: Do problems by hand, showing work unless otherwise instructed. Calculators are OK.1. For the points A = (5, -4) and B = (1, -12) a) Find the midpoint of AB b) Find the length of AB c) Find the slope of AB d) Find the equation of the line through A and B e) Find the coordinates of point C such that A is the midpoint of BC f) Honors Extra Credit: What point ...

File name: Chapter 2 Practice Test.pdf

[Download now or Read Online](#)

MICROSOFT WORD - CHAPTER P PRACTICE TEST.DOC

Algebra 2 P Chapter Practice Test Name: Please show your work. You are allowed only a basic calculator. This is last years test.1. Perform the indicated operations and simplify 2a) $(5x^2 - 7y)$ b) $(2x + 7)(3x^2 - 8x + 1)^2$. Factor each expression completelya) $x^2 - 3x - 40$ b) $2x^3 + x^2 - 6x - 3$ c) $x^4 + 5x^3 + 6x^2$ d) $2(a + b)^2 + 5(a + b) - 33$. a) Write $?x < 8$ in interval notation and...

File name: Chapter P Practice Test.pdf

[Download now or Read Online](#)

GEOMETRY TEST ANSWERS KEY CURRICULUM PRESS

Geometry Test Answers Key Curriculum Press pdfDOWNLOAD HEREDiscovering Geometry An Investigative Approachhttp cms cerritos edu uploads mallen Math 20070 20Worksheets DGPSA Ans pdf2008 Key Curriculum Press ANSWERS DG4PSA 894 ans qxd 11 1 06 10 37 AM Page 91 92 ANSWERS Discovering GeometryPractice Your Skills 2008 Key Curriculum PressPractice Your Skills with Answers - South Dade Senior Highhttp sds...

File name:





















[Download now or Read Online](#)

DOWNLOAD PDF DOCUMENT

DOWNLOAD PDF DOCUMENT

Here below another book similar with:

CHAPTER 2 GEOMETRY TEST

-  [geometry chapter 1 test review](#)
-  [chapter 2 geometry test](#)
-  [holt geometry chapter 4 test form b](#)
-  [geometry mcdougal test 3assessment answers](#)
-  [mcdougal littel geometry answer key test](#)
-  [cognero geometry test](#)
-  [geometry right triangles and trigonometry test packet](#)
-  [holt geometry eoc test prep texas](#)
-  [answers holt geometry test form](#)
-  [geometry regents practice test 3 answers](#)
-  [analytic geometry diagnostic test answer key](#)
-  [test questions for geometry constructions](#)
-  [test 51 supplementary geometry aanswers](#)
-  [unit 3 geometry test apex answers](#)
-  [geometry mid test answers](#)
-  [pearson environmental science test answers chapter three](#)
-  [chapter 10 cell growth and division test a answer key](#)
-  [the solar system chapter test answers](#)
-  [chapter 13 genetic engineering test answers](#)
-  [pearson abnormal psychology test bank chapter 6](#)

DOWNLOAD PDF DOCUMENT