

# DOWNLOAD PDF DOCUMENT



## CARNEGIE LEARNING ANSWE...

[DOWNLOAD DOCUMENT NOW](#)

**Updated:** 10/16/2017

---

### DISCLAIMER:

CHAUVIN.CO uses the following carnegie learning answer key skills practice geometry book available for free PDF download which is also related with

### CARNEGIE LEARNING ANSWER KEY SKILLS PRACTICE GEOMETRY

If you are looking for carnegie learning answer key skills practice geometry, you can use our site to download the needed PDF file. It is good news for you - no money is needed. We will help you to get carnegie learning answer key skills practice geometry quickly and easy. It will take you several seconds to create a free account and get the direct link to download carnegie learning answer key skills practice geometry. Registration is simple; there is a short instruction which can be used if you face such condition for the first time. You may ask why we use such methods. The answer is simple - it is because of numerous hackers' attacks that cause troubles and discomfort to those who want to download carnegie learning answer key skills practice geometry file for free. This data access helps to make the process of using our site more comfortable to people who need carnegie learning answer key skills practice geometry and other files. Our eBook database is unique; everyone can make use of it without paying a penny. Just download the necessary program, register and get an unlimited access to our stock of documents in PDF format.

---

[DOWNLOAD NOW](#)

# DOWNLOAD PDF DOCUMENT

# DOWNLOAD PDF DOCUMENT

## CARNEGIE LEARNING ANSWE...

---

### [LESSON 5.1 ? SKILLS PRACTICE](#)

Name Date We Like to Move It! Translating, Rotating, and Reflecting Geometric Figures Problem Set Transform each given geometric figure on the coordinate plane as described. 1. Translate trapezoid ABCD 11 units to the right. y A 9 B 8 B9 6 4 C C9 2 D D9 x 28 26 24 22 0 2 4 6 8 22 24 26 28 2. Translate triangle EFG 8 units up. 5 y 8 6 Carnegie Learning 4 2 28 26 24 22 0 2 4 6 8 x 22 E F 24 26 28 ...

**File name:** Skills Practice ch 5.pdf  
[Download now or Read Online](#)

### [SKILLS PRACTICE SKILLS PRACTICE FOR LESSON 4.1](#)

Name Date Interior and Exterior Angles of a Triangle Triangle Sum, Exterior Angle, and Exterior Angle Inequality Theorems Vocabulary Write the term that best completes each statement. 1. The Exterior Angle Inequality Theorem states that the measure of an exterior angle of a triangle is greater than the measure of either of the remote interior angles of the triangle. 2. The Triangle Sum Theorem st...

**File name:** Geometry Teacher\_s Skills Practice Chapter 4.pdf  
[Download now or Read Online](#)

### [LESSON 9.1? SKILLS PRACTICE](#)

Name Date Earth Measure Introduction to Geometry and Geometric Constructions Vocabulary Write the term that best completes the statement. 1. means to have the same size, shape, and measure. 2. In geometry, a construction can also be called a(n) . 3. A(n) is a ruler with no numbers. 4. is the study of shapes and measurement. 5. When you a geometric figure, the figure is created with the use of too...

**File name:** skills practice chapter 9.pdf  
[Download now or Read Online](#)

### [MICROSOFT WORD - ALGEBRA 2 SUMMER WORK ANSWER KEY.DOCX](#)

Algebra 2 Summer Work Answer Key Part 1 Non-Calculator Section Section A 9 1 10 16 2 11. (a) (b) (c) (d) (e) (f) (g) 50 10 2 13 5 5 25 2. (a)  $x = -25$  (b)  $g = 2$  (c)  $t = -1$  (d)  $w = -2$  (e)  $a = 0$  (f)  $x = 0$  8?  $x = 1$   $x = 3$ . (a)  $y =$  or  $y = ?$   $x + 4$  (b)  $y =$  or  $y = x$  2 2 2 4. (a)  $x ? 5$  (b)  $x < 1$  (c)  $x ? 2$  5. (a)  $-25 < x < 2$  (b)  $x < 0$  or  $x > 3$  6. (a)  $m = 0$  (b)  $m = -1$  (c) slope is undefined 1 47. (a)  $m = -1$  (b)  $m = (c...$

**File name:** Algebra 2 Summer Work Answer Key.pdf  
[Download now or Read Online](#)





















# DOWNLOAD PDF DOCUMENT

# DOWNLOAD PDF DOCUMENT

Here below another book similar with:

## CARNEGIE LEARNING ANSWE...

---

-  [carnegie learning answer key skills practice geometry](#)
-  [carnegie learning geometry student text answers](#)
-  [carnegie learning geometry assessment](#)
-  [carnegie learning and linear relationships](#)
-  [answers to carnegie learning volume 2](#)
-  [discovering geometry practice your skills answer](#)
-  [prentice hall geometry practice work answer key](#)
-  [holt geometry extra practice answer key](#)
-  [was andrew carnegie a hero dbq](#)
-  [annals of the carnegie museum volume 4](#)
-  [headway academic skills introductory listening speaking and study skills class 2 cds](#)
-  [graphing skills explore learning answers](#)
-  [geometry homework answers learning](#)
-  [apex learning study sheet answers geometry](#)
-  [exploring with the microscope a book of discovery and learning book of discovery learning](#)
-  [college writing skills langan 9th answer key pdf](#)
-  [answer key john langan english skills](#)
-  [map skills park habitat answer key](#)
-  [holt science chemistry skills answer key](#)
-  [holt biology photosynthesis active skills answer key](#)

# DOWNLOAD PDF DOCUMENT